

3.3 Product and Quotient Rules and Higher-Order Derivatives

- Find the derivative of a function using the Product Rule.
- Find the derivative of a function using the Quotient Rule.
- Find the derivative of a trigonometric function.
- Find a higher-order derivative of a function.

The Product Rule

In Section 3.2 you learned that the derivative of the sum of two functions is simply the sum of their derivatives. The rules for the derivatives of the product and quotient of two functions are not as simple.

NOTE A version of the Product Rule that some people prefer is

$$\frac{d}{dx}[f(x)g(x)] = f'(x)g(x) + f(x)g'(x).$$

The advantage of this form is that it generalizes easily to products of three or more factors.

THEOREM 3.8 THE PRODUCT RULE

The product of two differentiable functions f and g is itself differentiable. Moreover, the derivative of fg is the first function times the derivative of the second, plus the second function times the derivative of the first.

$$\frac{d}{dx}[f(x)g(x)] = f(x)g'(x) + g(x)f'(x)$$

PROOF Some mathematical proofs, such as the proof of the Sum Rule, are straightforward. Others involve clever steps that may appear unmotivated to a reader. This proof involves such a step—subtracting and adding the same quantity—which is shown in color.

$$\begin{aligned} \frac{d}{dx}[f(x)g(x)] &= \lim_{\Delta x \rightarrow 0} \frac{f(x + \Delta x)g(x + \Delta x) - f(x)g(x)}{\Delta x} \\ &= \lim_{\Delta x \rightarrow 0} \frac{f(x + \Delta x)g(x + \Delta x) - f(x + \Delta x)g(x) + f(x + \Delta x)g(x) - f(x)g(x)}{\Delta x} \\ &= \lim_{\Delta x \rightarrow 0} \left[f(x + \Delta x) \frac{g(x + \Delta x) - g(x)}{\Delta x} + g(x) \frac{f(x + \Delta x) - f(x)}{\Delta x} \right] \\ &= \lim_{\Delta x \rightarrow 0} \left[f(x + \Delta x) \frac{g(x + \Delta x) - g(x)}{\Delta x} \right] + \lim_{\Delta x \rightarrow 0} \left[g(x) \frac{f(x + \Delta x) - f(x)}{\Delta x} \right] \\ &= \lim_{\Delta x \rightarrow 0} f(x + \Delta x) \cdot \lim_{\Delta x \rightarrow 0} \frac{g(x + \Delta x) - g(x)}{\Delta x} + \lim_{\Delta x \rightarrow 0} g(x) \cdot \lim_{\Delta x \rightarrow 0} \frac{f(x + \Delta x) - f(x)}{\Delta x} \\ &= f(x)g'(x) + g(x)f'(x) \quad \blacksquare \end{aligned}$$

Note that $\lim_{\Delta x \rightarrow 0} f(x + \Delta x) = f(x)$ because f is given to be differentiable and therefore is continuous.

The Product Rule can be extended to cover products involving more than two factors. For example, if f , g , and h are differentiable functions of x , then

$$\frac{d}{dx}[f(x)g(x)h(x)] = f'(x)g(x)h(x) + f(x)g'(x)h(x) + f(x)g(x)h'(x).$$

For instance, the derivative of $y = x^2 \sin x \cos x$ is

$$\begin{aligned} \frac{dy}{dx} &= 2x \sin x \cos x + x^2 \cos x \cos x + x^2 \sin x (-\sin x) \\ &= 2x \sin x \cos x + x^2(\cos^2 x - \sin^2 x). \end{aligned}$$

NOTE The proof of the Product Rule for products of more than two factors is left as an exercise (see Exercise 141).

THE PRODUCT RULE

When Leibniz originally wrote a formula for the Product Rule, he was motivated by the expression

$$(x + dx)(y + dy) - xy$$

from which he subtracted $dx dy$ (as being negligible) and obtained the differential form $x dy + y dx$. This derivation resulted in the traditional form of the Product Rule. (Source: *The History of Mathematics by David M. Burton*)

The derivative of a product of two functions is not (in general) given by the product of the derivatives of the two functions. To see this, try comparing the product of the derivatives of $f(x) = 3x - 2x^2$ and $g(x) = 5 + 4x$ with the derivative in Example 1.

EXAMPLE 1 Using the Product Rule

Find the derivative of $h(x) = (3x - 2x^2)(5 + 4x)$.

Solution

$$\begin{aligned} h'(x) &= \overbrace{(3x - 2x^2)}^{\text{First}} \overbrace{\frac{d}{dx}[5 + 4x]}^{\text{Derivative of second}} + \overbrace{(5 + 4x)}^{\text{Second}} \overbrace{\frac{d}{dx}[3x - 2x^2]}^{\text{Derivative of first}} && \text{Apply Product Rule.} \\ &= (3x - 2x^2)(4) + (5 + 4x)(3 - 4x) \\ &= (12x - 8x^2) + (15 - 8x - 16x^2) \\ &= -24x^2 + 4x + 15 \end{aligned}$$

In Example 1, you have the option of finding the derivative with or without the Product Rule. To find the derivative without the Product Rule, you can write

$$\begin{aligned} D_x[(3x - 2x^2)(5 + 4x)] &= D_x[-8x^3 + 2x^2 + 15x] \\ &= -24x^2 + 4x + 15. \end{aligned}$$

In the next example, you must use the Product Rule.

EXAMPLE 2 Using the Product Rule

Find the derivative of $y = xe^x$.

Solution

$$\begin{aligned} \frac{d}{dx}[xe^x] &= x \frac{d}{dx}[e^x] + e^x \frac{d}{dx}[x] && \text{Apply Product Rule.} \\ &= xe^x + e^x(1) \\ &= e^x(x + 1) \end{aligned}$$

EXAMPLE 3 Using the Product Rule

Find the derivative of $y = 2x \cos x - 2 \sin x$.

Solution

$$\begin{aligned} \frac{dy}{dx} &= \overbrace{(2x) \left(\frac{d}{dx}[\cos x] \right)}^{\text{Product Rule}} + \overbrace{(\cos x) \left(\frac{d}{dx}[2x] \right)}^{\text{Product Rule}} - \overbrace{2 \frac{d}{dx}[\sin x]}^{\text{Constant Multiple Rule}} \\ &= (2x)(-\sin x) + (\cos x)(2) - 2(\cos x) \\ &= -2x \sin x \end{aligned}$$

NOTE In Example 3, notice that you use the Product Rule when both factors of the product are variable, and you use the Constant Multiple Rule when one of the factors is a constant.

The Quotient Rule

THEOREM 3.9 THE QUOTIENT RULE

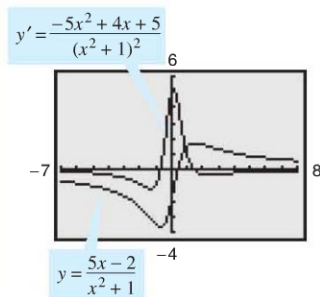
The quotient f/g of two differentiable functions f and g is itself differentiable at all values of x for which $g(x) \neq 0$. Moreover, the derivative of f/g is given by the denominator times the derivative of the numerator minus the numerator times the derivative of the denominator, all divided by the square of the denominator.

$$\frac{d}{dx} \left[\frac{f(x)}{g(x)} \right] = \frac{g(x)f'(x) - f(x)g'(x)}{[g(x)]^2}, \quad g(x) \neq 0$$

PROOF As with the proof of Theorem 3.8, the key to this proof is subtracting and adding the same quantity.

$$\begin{aligned} \frac{d}{dx} \left[\frac{f(x)}{g(x)} \right] &= \lim_{\Delta x \rightarrow 0} \frac{\frac{f(x + \Delta x)}{g(x + \Delta x)} - \frac{f(x)}{g(x)}}{\Delta x} && \text{Definition of derivative} \\ &= \lim_{\Delta x \rightarrow 0} \frac{g(x)f(x + \Delta x) - f(x)g(x + \Delta x)}{\Delta x g(x)g(x + \Delta x)} \\ &= \lim_{\Delta x \rightarrow 0} \frac{g(x)f(x + \Delta x) - f(x)g(x) + f(x)g(x) - f(x)g(x + \Delta x)}{\Delta x g(x)g(x + \Delta x)} \\ &= \frac{\lim_{\Delta x \rightarrow 0} \frac{g(x)[f(x + \Delta x) - f(x)]}{\Delta x} - \lim_{\Delta x \rightarrow 0} \frac{f(x)[g(x + \Delta x) - g(x)]}{\Delta x}}{\lim_{\Delta x \rightarrow 0} [g(x)g(x + \Delta x)]} \\ &= \frac{g(x) \left[\lim_{\Delta x \rightarrow 0} \frac{f(x + \Delta x) - f(x)}{\Delta x} \right] - f(x) \left[\lim_{\Delta x \rightarrow 0} \frac{g(x + \Delta x) - g(x)}{\Delta x} \right]}{\lim_{\Delta x \rightarrow 0} [g(x)g(x + \Delta x)]} \\ &= \frac{g(x)f'(x) - f(x)g'(x)}{[g(x)]^2} \end{aligned}$$

TECHNOLOGY Graphing utilities can be used to compare the graph of a function with the graph of its derivative. For instance, in Figure 3.23, the graph of the function in Example 4 appears to have two points that have horizontal tangent lines. What are the values of y' at these two points?



Graphical comparison of a function and its derivative
Figure 3.23

Note that $\lim_{\Delta x \rightarrow 0} g(x + \Delta x) = g(x)$ because g is given to be differentiable and therefore is continuous.

EXAMPLE 4 Using the Quotient Rule

Find the derivative of $y = \frac{5x - 2}{x^2 + 1}$.

Solution

$$\begin{aligned} \frac{d}{dx} \left[\frac{5x - 2}{x^2 + 1} \right] &= \frac{(x^2 + 1) \frac{d}{dx} [5x - 2] - (5x - 2) \frac{d}{dx} [x^2 + 1]}{(x^2 + 1)^2} && \text{Apply Quotient Rule.} \\ &= \frac{(x^2 + 1)(5) - (5x - 2)(2x)}{(x^2 + 1)^2} \\ &= \frac{(5x^2 + 5) - (10x^2 - 4x)}{(x^2 + 1)^2} \\ &= \frac{-5x^2 + 4x + 5}{(x^2 + 1)^2} \end{aligned}$$

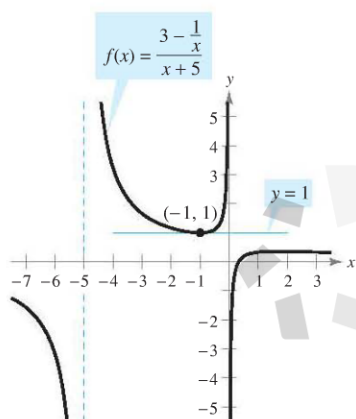
Note the use of parentheses in Example 4. A liberal use of parentheses is recommended for *all* types of differentiation problems. For instance, with the Quotient Rule, it is a good idea to enclose all factors and derivatives in parentheses, and to pay special attention to the subtraction required in the numerator.

When differentiation rules were introduced in the preceding section, the need for rewriting *before* differentiating was emphasized. The next example illustrates this point with the Quotient Rule.

EXAMPLE 5 Rewriting Before Differentiating

Find an equation of the tangent line to the graph of $f(x) = \frac{3 - (1/x)}{x + 5}$ at $(-1, 1)$.

Solution Begin by rewriting the function.



The line $y = 1$ is tangent to the graph of $f(x)$ at the point $(-1, 1)$.

Figure 3.24

$$\begin{aligned}
 f(x) &= \frac{3 - (1/x)}{x + 5} && \text{Write original function.} \\
 &= \frac{x\left(3 - \frac{1}{x}\right)}{x(x + 5)} && \text{Multiply numerator and denominator by } x. \\
 &= \frac{3x - 1}{x^2 + 5x} && \text{Rewrite.} \\
 f'(x) &= \frac{(x^2 + 5x)(3) - (3x - 1)(2x + 5)}{(x^2 + 5x)^2} && \text{Apply Quotient Rule.} \\
 &= \frac{(3x^2 + 15x) - (6x^2 + 13x - 5)}{(x^2 + 5x)^2} \\
 &= \frac{-3x^2 + 2x + 5}{(x^2 + 5x)^2} && \text{Simplify.}
 \end{aligned}$$

To find the slope at $(-1, 1)$, evaluate $f'(-1)$.

$$f'(-1) = 0 \quad \text{Slope of graph at } (-1, 1)$$

Then, using the point-slope form of the equation of a line, you can determine that the equation of the tangent line at $(-1, 1)$ is $y = 1$. See Figure 3.24. ■

Not every quotient needs to be differentiated by the Quotient Rule. For example, each quotient in the next example can be considered as the product of a constant times a function of x . In such cases it is more convenient to use the Constant Multiple Rule.

EXAMPLE 6 Using the Constant Multiple Rule

<u>Original Function</u>	<u>Rewrite</u>	<u>Differentiate</u>	<u>Simplify</u>
a. $y = \frac{x^2 + 3x}{6}$	$y = \frac{1}{6}(x^2 + 3x)$	$y' = \frac{1}{6}(2x + 3)$	$y' = \frac{2x + 3}{6}$
b. $y = \frac{5x^4}{8}$	$y = \frac{5}{8}x^4$	$y' = \frac{5}{8}(4x^3)$	$y' = \frac{5}{2}x^3$
c. $y = \frac{-3(3x - 2x^2)}{7x}$	$y = -\frac{3}{7}(3 - 2x)$	$y' = -\frac{3}{7}(-2)$	$y' = \frac{6}{7}$
d. $y = \frac{9}{5x^2}$	$y = \frac{9}{5}(x^{-2})$	$y' = \frac{9}{5}(-2x^{-3})$	$y' = -\frac{18}{5x^3}$

NOTE To see the benefit of using the Constant Multiple Rule for some quotients, try using the Quotient Rule to differentiate the functions in Example 6—you should obtain the same results, but with more work. ■

In Section 3.2, the Power Rule was proved only for the case in which the exponent n is a positive integer greater than 1. The next example extends the proof to include negative integer exponents.

EXAMPLE 7 Proof of the Power Rule (Negative Integer Exponents)

If n is a negative integer, there exists a positive integer k such that $n = -k$. So, by the Quotient Rule, you can write

$$\begin{aligned} \frac{d}{dx}[x^n] &= \frac{d}{dx}\left[\frac{1}{x^k}\right] \\ &= \frac{x^k(0) - (1)(kx^{k-1})}{(x^k)^2} && \text{Quotient Rule and Power Rule} \\ &= \frac{0 - kx^{k-1}}{x^{2k}} \\ &= -kx^{-k-1} \\ &= nx^{n-1}. && n = -k \end{aligned}$$

So, the Power Rule

$$\frac{d}{dx}[x^n] = nx^{n-1} \quad \text{Power Rule}$$

is valid for any integer. The cases for which n is rational and n is irrational are left as an exercise (see Section 3.5, Exercise 100). ■

Derivatives of Trigonometric Functions

Knowing the derivatives of the sine and cosine functions, you can use the Quotient Rule to find the derivatives of the four remaining trigonometric functions.

THEOREM 3.10 DERIVATIVES OF TRIGONOMETRIC FUNCTIONS

$\frac{d}{dx}[\tan x] = \sec^2 x$	$\frac{d}{dx}[\cot x] = -\csc^2 x$
$\frac{d}{dx}[\sec x] = \sec x \tan x$	$\frac{d}{dx}[\csc x] = -\csc x \cot x$

PROOF Considering $\tan x = (\sin x)/(\cos x)$ and applying the Quotient Rule, you obtain

$$\begin{aligned} \frac{d}{dx}[\tan x] &= \frac{(\cos x)(\cos x) - (\sin x)(-\sin x)}{\cos^2 x} && \text{Apply Quotient Rule.} \\ &= \frac{\cos^2 x + \sin^2 x}{\cos^2 x} \\ &= \frac{1}{\cos^2 x} \\ &= \sec^2 x. \end{aligned}$$

The proofs of the other three parts of the theorem are left as an exercise (see Exercise 91). ■

EXAMPLE 8 Differentiating Trigonometric Functions

NOTE Because of trigonometric identities, the derivative of a trigonometric function can take many forms. This presents a challenge when you are trying to match your answers to those given in the back of the text.

Function	Derivative
a. $y = x - \tan x$	$\frac{dy}{dx} = 1 - \sec^2 x$
b. $y = x \sec x$	$y' = x(\sec x \tan x) + (\sec x)(1)$ $= (\sec x)(1 + x \tan x)$

EXAMPLE 9 Different Forms of a Derivative

Differentiate both forms of $y = \frac{1 - \cos x}{\sin x} = \csc x - \cot x$.

Solution

First form: $y = \frac{1 - \cos x}{\sin x}$

$$y' = \frac{(\sin x)(\sin x) - (1 - \cos x)(\cos x)}{\sin^2 x}$$

$$= \frac{\sin^2 x + \cos^2 x - \cos x}{\sin^2 x}$$

Second form: $y = \csc x - \cot x$

$$y' = -\csc x \cot x + \csc^2 x$$

To verify that the two derivatives are equal, you can write

$$\frac{1 - \cos x}{\sin^2 x} = \frac{1}{\sin^2 x} - \left(\frac{1}{\sin x}\right)\left(\frac{\cos x}{\sin x}\right)$$

$$= \csc^2 x - \csc x \cot x.$$

The summary below shows that much of the work in obtaining a simplified form of a derivative occurs *after* differentiating. Note that two characteristics of a simplified form are the absence of negative exponents and the combining of like terms.

	$f'(x)$ After Differentiating	$f'(x)$ After Simplifying
Example 1	$(3x - 2x^2)(4) + (5 + 4x)(3 - 4x)$	$-24x^2 + 4x + 15$
Example 3	$(2x)(-\sin x) + (\cos x)(2) - 2(\cos x)$	$-2x \sin x$
Example 4	$\frac{(x^2 + 1)(5) - (5x - 2)(2x)}{(x^2 + 1)^2}$	$\frac{-5x^2 + 4x + 5}{(x^2 + 1)^2}$
Example 5	$\frac{(x^2 + 5x)(3) - (3x - 1)(2x + 5)}{(x^2 + 5x)^2}$	$\frac{-3x^2 + 2x + 5}{(x^2 + 5x)^2}$
Example 9	$\frac{(\sin x)(\sin x) - (1 - \cos x)(\cos x)}{\sin^2 x}$	$\frac{1 - \cos x}{\sin^2 x}$

EXPLORATION

For which of the functions

$$y = e^x, \quad y = \frac{1}{e^x}$$

$$y = \sin x, \quad y = \cos x$$

are the following equations true?

- a. $y = y'$ b. $y = y''$
- c. $y = y'''$ d. $y = y^{(4)}$

Without determining the actual derivative, is $y = y^{(8)}$ for $y = \sin x$ true? What conclusion can you draw from this?



THE MOON

The moon's mass is 7.349×10^{22} kilograms, and Earth's mass is 5.976×10^{24} kilograms. The moon's radius is 1737 kilometers, and Earth's radius is 6378 kilometers. Because the gravitational force on the surface of a planet is directly proportional to its mass and inversely proportional to the square of its radius, the ratio of the gravitational force on Earth to the gravitational force on the moon is

$$\frac{(5.976 \times 10^{24})/6378^2}{(7.349 \times 10^{22})/1737^2} \approx 6.0.$$

Higher-Order Derivatives

Just as you can obtain a velocity function by differentiating a position function, you can obtain an **acceleration** function by differentiating a velocity function. Another way of looking at this is that you can obtain an acceleration function by differentiating a position function *twice*.

$$\begin{aligned} s(t) & \text{ Position function} \\ v(t) = s'(t) & \text{ Velocity function} \\ a(t) = v'(t) = s''(t) & \text{ Acceleration function} \end{aligned}$$

The function given by $a(t)$ is the **second derivative** of $s(t)$ and is denoted by $s''(t)$.

The second derivative is an example of a **higher-order derivative**. You can define derivatives of any positive integer order. For instance, the **third derivative** is the derivative of the second derivative. Higher-order derivatives are denoted as follows.

First derivative: $y', f'(x), \frac{dy}{dx}, \frac{d}{dx}[f(x)], D_x[y]$

Second derivative: $y'', f''(x), \frac{d^2y}{dx^2}, \frac{d^2}{dx^2}[f(x)], D_x^2[y]$

Third derivative: $y''', f'''(x), \frac{d^3y}{dx^3}, \frac{d^3}{dx^3}[f(x)], D_x^3[y]$

Fourth derivative: $y^{(4)}, f^{(4)}(x), \frac{d^4y}{dx^4}, \frac{d^4}{dx^4}[f(x)], D_x^4[y]$

n th derivative: $y^{(n)}, f^{(n)}(x), \frac{d^ny}{dx^n}, \frac{d^n}{dx^n}[f(x)], D_x^n[y]$

EXAMPLE 10 Finding the Acceleration Due to Gravity

Because the moon has no atmosphere, a falling object on the moon encounters no air resistance. In 1971, astronaut David Scott demonstrated that a feather and a hammer fall at the same rate on the moon. The position function for each of these falling objects is given by

$$s(t) = -0.81t^2 + 2$$

where $s(t)$ is the height in meters and t is the time in seconds. What is the ratio of Earth's gravitational force to the moon's?

Solution To find the acceleration, differentiate the position function twice.

$$\begin{aligned} s(t) &= -0.81t^2 + 2 && \text{Position function} \\ s'(t) &= -1.62t && \text{Velocity function} \\ s''(t) &= -1.62 && \text{Acceleration function} \end{aligned}$$

So, the acceleration due to gravity on the moon is -1.62 meters per second per second. Because the acceleration due to gravity on Earth is -9.8 meters per second per second, the ratio of Earth's gravitational force to the moon's is

$$\begin{aligned} \frac{\text{Earth's gravitational force}}{\text{Moon's gravitational force}} &= \frac{-9.8}{-1.62} \\ &\approx 6.0. \end{aligned}$$

3.3 Exercises

See www.CalcChat.com for worked-out solutions to odd-numbered exercises.

In Exercises 1–6, use the Product Rule to differentiate the function.

1. $g(x) = (x^2 + 3)(x^2 - 4x)$
2. $f(x) = (6x + 5)(x^3 - 2)$
3. $h(t) = \sqrt{t}(1 - t^2)$
4. $g(s) = \sqrt{s}(s^2 + 8)$
5. $f(x) = e^x \cos x$
6. $g(x) = \sqrt{x} \sin x$

In Exercises 7–12, use the Quotient Rule to differentiate the function.

7. $f(x) = \frac{x}{x^2 + 1}$
8. $g(t) = \frac{t^2 + 4}{5t - 3}$
9. $h(x) = \frac{\sqrt{x}}{x^3 + 1}$
10. $h(s) = \frac{s}{\sqrt{s} - 1}$
11. $g(x) = \frac{\sin x}{e^x}$
12. $f(t) = \frac{\cos t}{t^3}$

In Exercises 13–18, find $f'(x)$ and $f'(c)$.

Function	Value of c
13. $f(x) = (x^3 + 4x)(3x^2 + 2x - 5)$	$c = 0$
14. $f(x) = \frac{x + 5}{x - 5}$	$c = 4$
15. $f(x) = x \cos x$	$c = \frac{\pi}{4}$
16. $f(x) = \frac{\sin x}{x}$	$c = \frac{\pi}{6}$
17. $f(x) = e^x \sin x$	$c = 0$
18. $f(x) = \frac{\cos x}{e^x}$	$c = 0$

In Exercises 19–24, complete the table without using the Quotient Rule.

Function	Rewrite	Differentiate	Simplify
19. $y = \frac{x^2 + 3x}{7}$			
20. $y = \frac{5x^2 - 3}{4}$			
21. $y = \frac{6}{7x^2}$			
22. $y = \frac{10}{3x^3}$			
23. $y = \frac{4x^{3/2}}{x}$			
24. $y = \frac{5x^2 - 8}{11}$			

In Exercises 25–38, find the derivative of the algebraic function.

25. $f(x) = \frac{4 - 3x - x^2}{x^2 - 1}$
26. $f(x) = \frac{x^3 + 5x + 3}{x^2 - 1}$
27. $f(x) = x\left(1 - \frac{4}{x + 3}\right)$
28. $f(x) = x^4\left(1 - \frac{2}{x + 1}\right)$
29. $f(x) = \frac{3x - 1}{\sqrt{x}}$
30. $f(x) = \sqrt[3]{x}(\sqrt{x} + 3)$
31. $h(s) = (s^3 - 2)^2$
32. $h(x) = (x^2 - 1)^2$
33. $f(x) = \frac{2 - \frac{1}{x}}{x - 3}$
34. $g(x) = x^2\left(\frac{2}{x} - \frac{1}{x + 1}\right)$
35. $f(x) = (2x^3 + 5x)(x - 3)(x + 2)$
36. $f(x) = (x^3 - x)(x^2 + 2)(x^2 + x - 1)$
37. $f(x) = \frac{x^2 + c^2}{x^2 - c^2}$, c is a constant
38. $f(x) = \frac{c^2 - x^2}{c^2 + x^2}$, c is a constant

In Exercises 39–56, find the derivative of the transcendental function.

39. $f(t) = t^2 \sin t$
40. $f(\theta) = (\theta + 1) \cos \theta$
41. $f(t) = \frac{\cos t}{t}$
42. $f(x) = \frac{\sin x}{x^3}$
43. $f(x) = -e^x + \tan x$
44. $y = e^x - \cot x$
45. $g(t) = \sqrt[4]{t} + 6 \csc t$
46. $h(x) = \frac{1}{x} - 12 \sec x$
47. $y = \frac{3(1 - \sin x)}{2 \cos x}$
48. $y = \frac{\sec x}{x}$
49. $y = -\csc x - \sin x$
50. $y = x \cos x + \sin x$
51. $f(x) = x^2 \tan x$
52. $f(x) = 2 \sin x \cos x$
53. $y = 2x \sin x + x^2 e^x$
54. $h(x) = 2e^x \cos x$
55. $y = \frac{e^x}{4\sqrt{x}}$
56. $y = \frac{2e^x}{x^2 + 1}$

CAS In Exercises 57–60, use a computer algebra system to differentiate the function.

57. $g(x) = \left(\frac{x + 1}{x + 2}\right)(2x - 5)$
58. $f(x) = \left(\frac{x^2 - x - 3}{x^2 + 1}\right)(x^2 + x + 1)$
59. $g(\theta) = \frac{\theta}{1 - \sin \theta}$
60. $f(\theta) = \frac{\sin \theta}{1 - \cos \theta}$

The symbol **CAS** indicates an exercise in which you are instructed to specifically use a computer algebra system.

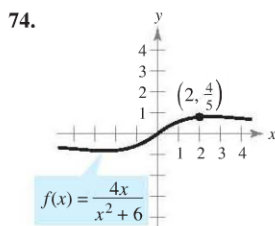
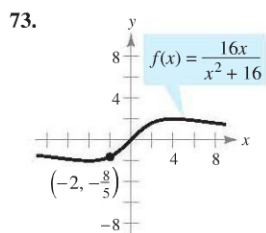
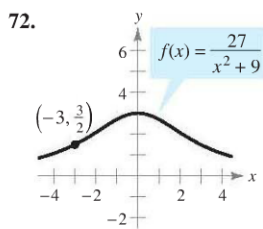
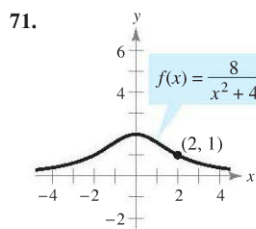
In Exercises 61–64, evaluate the derivative of the function at the given point. Use a graphing utility to verify your result.

Function	Point
61. $y = \frac{1 + \csc x}{1 - \csc x}$	$(\frac{\pi}{6}, -3)$
62. $f(x) = \tan x \cot x$	$(1, 1)$
63. $h(t) = \frac{\sec t}{t}$	$(\pi, -\frac{1}{\pi})$
64. $f(x) = \sin x(\sin x + \cos x)$	$(\frac{\pi}{4}, 1)$

AP In Exercises 65–70, (a) find an equation of the tangent line to the graph of f at the given point, (b) use a graphing utility to graph the function and its tangent line at the point, and (c) use the derivative feature of a graphing utility to confirm your results.

Function	Point
65. $f(x) = (x^3 + 4x - 1)(x - 2)$	$(1, -4)$
66. $f(x) = \frac{x - 1}{x + 1}$	$(2, \frac{1}{3})$
67. $f(x) = \tan x$	$(\frac{\pi}{4}, 1)$
68. $f(x) = \sec x$	$(\frac{\pi}{3}, 2)$
69. $f(x) = (x - 1)e^x$	$(1, 0)$
70. $f(x) = \frac{e^x}{x + 4}$	$(0, \frac{1}{4})$

Famous Curves In Exercises 71–74, find an equation of the tangent line to the graph at the given point. (The graphs in Exercises 71 and 72 are called *witches of Agnesi*. The graphs in Exercises 73 and 74 are called *serpentes*.)



In Exercises 75–78, determine the point(s) at which the graph of the function has a horizontal tangent line.

75. $f(x) = \frac{2x - 1}{x^2}$ 76. $f(x) = \frac{x^2}{x^2 + 1}$
 77. $g(x) = \frac{8(x - 2)}{e^x}$ 78. $f(x) = e^x \sin x, [0, \pi]$

79. **Tangent Lines** Find equations of the tangent lines to the graph of $f(x) = (x + 1)/(x - 1)$ that are parallel to the line $2y + x = 6$. Then graph the function and the tangent lines.

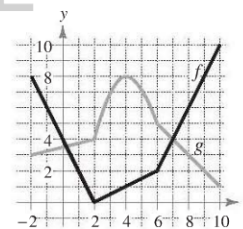
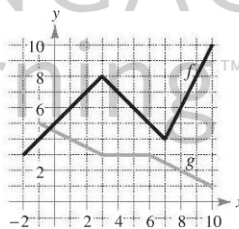
80. **Tangent Lines** Find equations of the tangent lines to the graph of $f(x) = x/(x - 1)$ that pass through the point $(-1, 5)$. Then graph the function and the tangent lines.

In Exercises 81 and 82, verify that $f'(x) = g'(x)$, and explain the relationship between f and g .

81. $f(x) = \frac{3x}{x + 2}, g(x) = \frac{5x + 4}{x + 2}$
 82. $f(x) = \frac{\sin x - 3x}{x}, g(x) = \frac{\sin x + 2x}{x}$

In Exercises 83 and 84, use the graphs of f and g . Let $p(x) = f(x)g(x)$ and $q(x) = f(x)/g(x)$.

83. (a) Find $p'(1)$. 84. (a) Find $p'(4)$.
 (b) Find $q'(4)$. (b) Find $q'(7)$.



85. **Area** The length of a rectangle is given by $6t + 5$ and its height is \sqrt{t} , where t is time in seconds and the dimensions are in centimeters. Find the rate of change of the area with respect to time.

86. **Volume** The radius of a right circular cylinder is given by $\sqrt{t + 2}$ and its height is $\frac{1}{2}\sqrt{t}$, where t is time in seconds and the dimensions are in inches. Find the rate of change of the volume with respect to time.

87. **Inventory Replenishment** The ordering and transportation cost C for the components used in manufacturing a product is

$$C = \frac{375,000 + 6x^2}{x}, \quad x \geq 1$$

where C is measured in dollars and x is the order size. Find the rate of change of C with respect to x when (a) $x = 200$, (b) $x = 250$, and (c) $x = 300$. Interpret the meanings of these values.

88. **Boyle's Law** This law states that if the temperature of a gas remains constant, its pressure is inversely proportional to its volume. Use the derivative to show that the rate of change of the pressure is inversely proportional to the square of the volume.

- 89. Population Growth** A population of 500 bacteria is introduced into a culture and grows in number according to the equation

$$P(t) = 500 \left(1 + \frac{4t}{50 + t^2} \right)$$

where t is measured in hours. Find the rate at which the population is growing when $t = 2$.

- 90. Gravitational Force** Newton's Law of Universal Gravitation states that the force F between two masses, m_1 and m_2 , is

$$F = \frac{Gm_1m_2}{d^2}$$

where G is a constant and d is the distance between the masses. Find an equation that gives an instantaneous rate of change of F with respect to d . (Assume that m_1 and m_2 represent moving points.)

- 91.** Prove the following differentiation rules.

(a) $\frac{d}{dx}[\sec x] = \sec x \tan x$ (b) $\frac{d}{dx}[\csc x] = -\csc x \cot x$

(c) $\frac{d}{dx}[\cot x] = -\csc^2 x$

- 92. Rate of Change** Determine whether there exist any values of x in the interval $[0, 2\pi)$ such that the rate of change of $f(x) = \sec x$ and the rate of change of $g(x) = \csc x$ are equal.

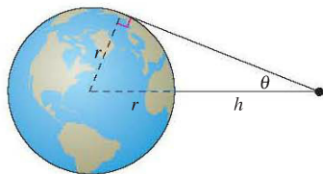


- 93. Modeling Data** The table shows the quantities q (in millions) of personal computers shipped in the United States and the values v (in billions of dollars) of these shipments for the years 1999 through 2004. The year is represented by t , with $t = 9$ corresponding to 1999. (Source: U.S. Census Bureau)

Year, t	9	10	11	12	13	14
q	19.6	15.9	14.6	12.9	15.0	15.8
v	26.8	22.6	18.9	16.2	14.7	15.3

- (a) Use a graphing utility to find cubic models for the quantity of personal computers shipped $q(t)$ and the value $v(t)$ of the personal computers.
 (b) Graph each model found in part (a).
 (c) Find $A = v(t)/q(t)$, then graph A . What does this function represent?
 (d) Interpret $A'(t)$ in the context of these data.

- 94. Satellites** When satellites observe Earth, they can scan only part of Earth's surface. Some satellites have sensors that can measure the angle θ shown in the figure. Let h represent the satellite's distance from Earth's surface and let r represent Earth's radius.



- (a) Show that $h = r(\csc \theta - 1)$.
 (b) Find the rate at which h is changing with respect to θ when $\theta = 30^\circ$. (Assume $r = 3960$ miles.)

In Exercises 95–102, find the second derivative of the function.

95. $f(x) = 4x^{3/2}$

96. $f(x) = x + 32x^{-2}$

97. $f(x) = \frac{x}{x-1}$

98. $f(x) = \frac{x^2 + 2x - 1}{x}$

99. $f(x) = x \sin x$

100. $f(x) = \sec x$

101. $g(x) = \frac{e^x}{x}$

102. $h(t) = e^t \sin t$

In Exercises 103–106, find the given higher-order derivative.

Given	Find
103. $f'(x) = x^2$	$f''(x)$
104. $f''(x) = 2 - \frac{2}{x}$	$f'''(x)$
105. $f'''(x) = 2\sqrt{x}$	$f^{(4)}(x)$
106. $f^{(4)}(x) = 2x + 1$	$f^{(6)}(x)$

WRITING ABOUT CONCEPTS

- 107.** Sketch the graph of a differentiable function f such that $f(2) = 0$, $f' < 0$ for $-\infty < x < 2$, and $f' > 0$ for $2 < x < \infty$.

- 108.** Sketch the graph of a differentiable function f such that $f > 0$ and $f' < 0$ for all real numbers x .

In Exercises 109–112, use the given information to find $f'(2)$.

$g(2) = 3$ and $g'(2) = -2$

$h(2) = -1$ and $h'(2) = 4$

109. $f(x) = 2g(x) + h(x)$

110. $f(x) = 4 - h(x)$

111. $f(x) = \frac{g(x)}{h(x)}$

112. $f(x) = g(x)h(x)$

In Exercises 113 and 114, the graphs of f , f' , and f'' are shown on the same set of coordinate axes. Identify each graph. Explain your reasoning. To print an enlarged copy of the graph, go to the website www.mathgraphs.com.

